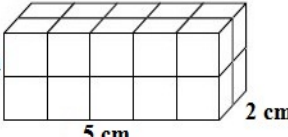


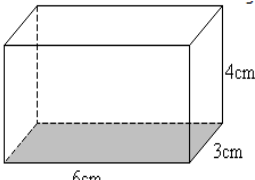
Name _____ Date _____ Per _____

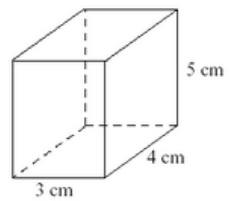
PRACTICE (CCSS 6.G.4)

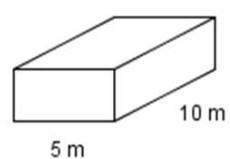
Rectangular Prisms Nets and Surface Area

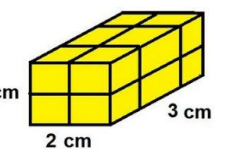
Directions: Match the net with its correct 3-dimensional rectangular prism. Write the letter on the blank next to each rectangular prism's number. Then, find the surface area. Don't forget to label your answer.

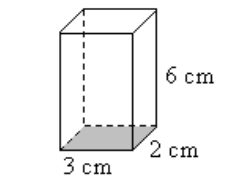
1.  SA= _____

2.  SA= _____

3.  SA= _____

4.  SA= _____

5.  SA= _____

6.  SA= _____

