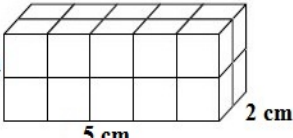


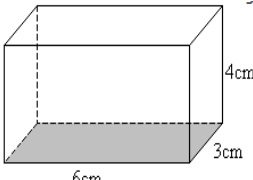
Name \_\_\_\_\_ Date \_\_\_\_\_ Per \_\_\_\_\_

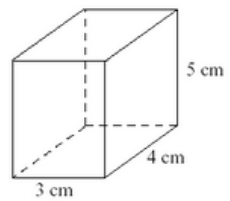
**PRACTICE (CCSS 6.G.4)**

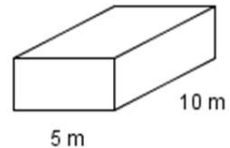
*Rectangular Prisms Nets and Surface Area*

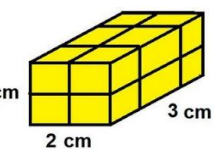
**Directions:** Match the net with its correct 3-dimensional rectangular prism. Write the letter on the blank next to each rectangular prism's number. Then, find the surface area. Don't forget to label your answer.

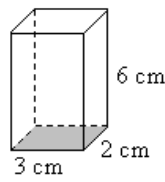
F 1.    
 SA= 48 sq.cm.

A 2.    
 SA= 108 sq.cm.

E 3.    
 SA= 94 sq.cm.

H 4.    
 SA= 160 sq.m.

C 5.    
 SA= 32 sq.cm.

G 6.    
 SA= 72 sq.cm.

